

Year 7 (Foundation): Angles

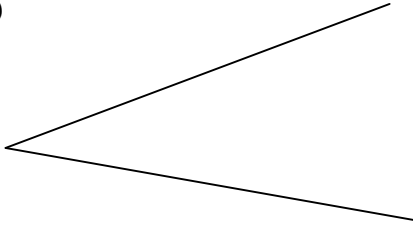
No Calculators Allowed!

Name:- _____ Form:- _____ Set:- _____

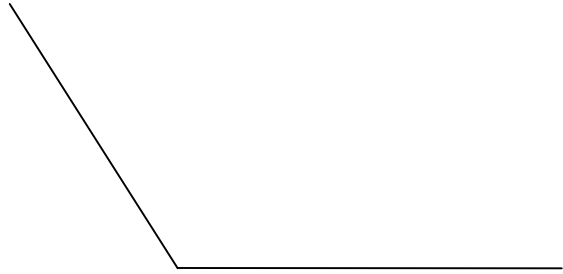
1) Score = ___/10 = ___% Effort = ___

Measure the following angles:

1)

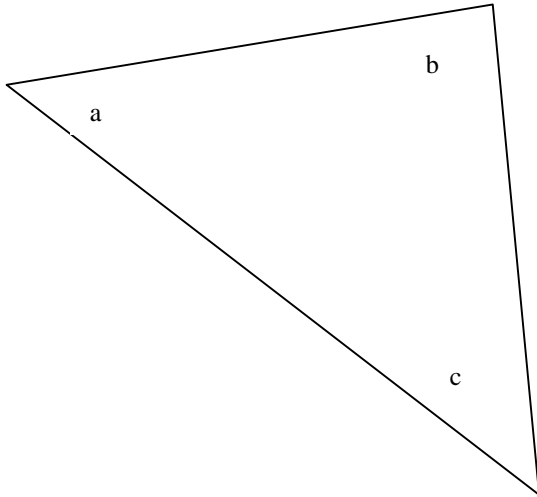


2)



(2)

3)



(3)

4) Draw an angle of 40° (2)

5) Draw an angle of 135° (2)

6) What type of angle is this? _____ (1)