

Year 7 (Foundation): Fractions, Decimals and Percentages 2

No Calculators Allowed!

Name:- _____ Form:- _____ Set:- _____

1) Score = ____/10 = ____% Effort = ____ 2) Score = ____/10 = ____% Effort = ____

1. Look at the fraction below a) What is the value of the DENOMINATOR?


$$\frac{3}{5}$$

..... (1)

b) What is the value of the NUMERATOR?

..... (1)

2. a) What fraction of this shape is shaded?

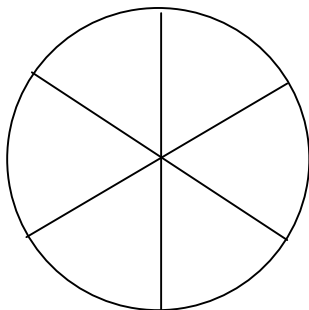


..... (1)

b) What fraction of this shape is NOT shaded?

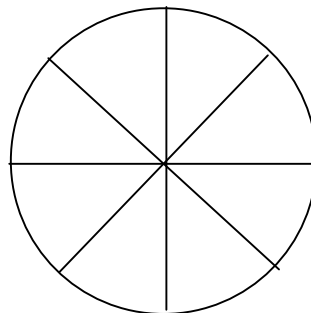
..... (1)

3. a) shade $\frac{1}{2}$ of this diagram



(1)

b) shade $\frac{3}{4}$ of this diagram



(1)

4.

a) find $\frac{1}{2}$ of 12(1)

c) find $\frac{1}{4}$ of 24(1)

b) find $\frac{1}{2}$ of 26(1)

d) find $\frac{1}{3}$ of 30(1)