

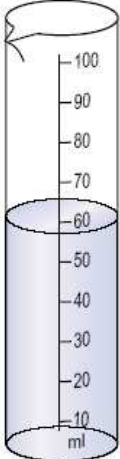

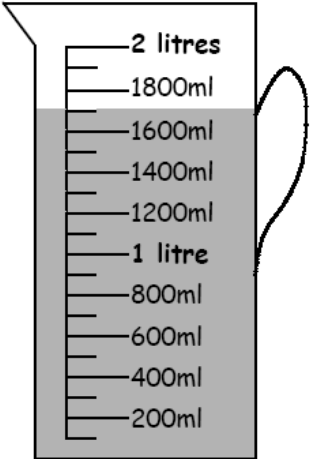
Year 7 (Foundation): Shape, space and measure

No Calculators Allowed!

Name:- _____ Form:- _____ Set:- _____

1) Score = ____/10 = ____% Effort = ____


Write down how much is shown on each of the following:

		
---	---	---


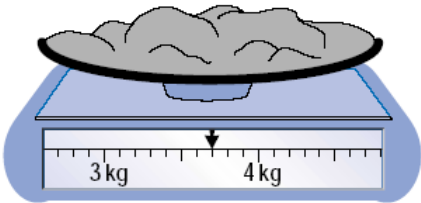
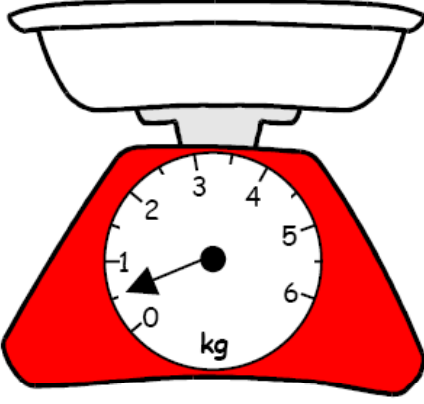
Q1ml

Q2g

Q3ml



Q4mm

		
---	--	---

Q5°C

Q6kg

Q7kg

On each of the jugs below, mark the amount stated

Q8 Show 500ml	Q9 Show 250ml	Q10 Show 1.5L
---------------	---------------	---------------

Year 7 (Foundation): Shape, space and measure

No Calculators Allowed!

Name:- _____ Form:- _____ Set:- _____

1) Score = ____/10 = ____% Effort = ____

