

Year 7 (Foundation): Shape and space

No Calculators Allowed!

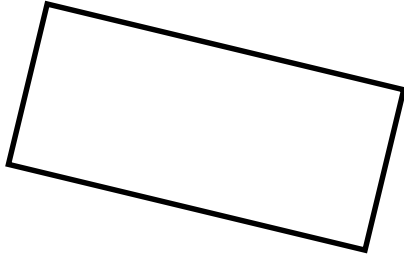
Name:- _____ Form:- _____ Set:- _____

1) Score = ____/10 = ____% Effort = ____ 2) Score = ____/10 = ____% Effort = ____

1. Here is a rectangle.

a) Mark one pair of sides that are parallel with a $>$ sign on each. (2)

b) Mark another pair of sides that are parallel with a $>>$ sign on each. (1)

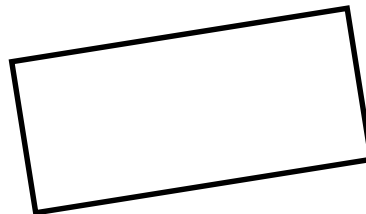
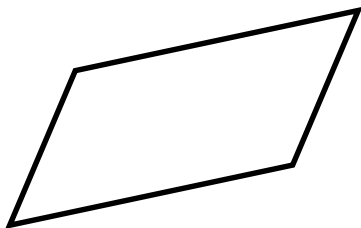


2. Here are 2 quadrilaterals (4-sided shapes).

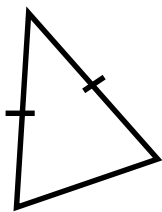
a) Put a big cross in the middle of the one that is a rectangle. (1)

b) Explain why the one you chose is a rectangle and the other one isn't (2)

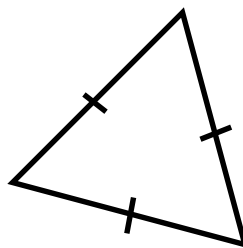
.....




3. Write down the correct name of these triangles **underneath** each shape



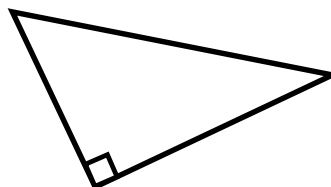
.....



.....



.....



.....

(4)