

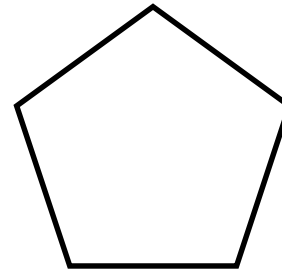


Year 7 (Foundation): Shape and space 2

No Calculators Allowed!

Name:- _____ Form:- _____ Set:- _____

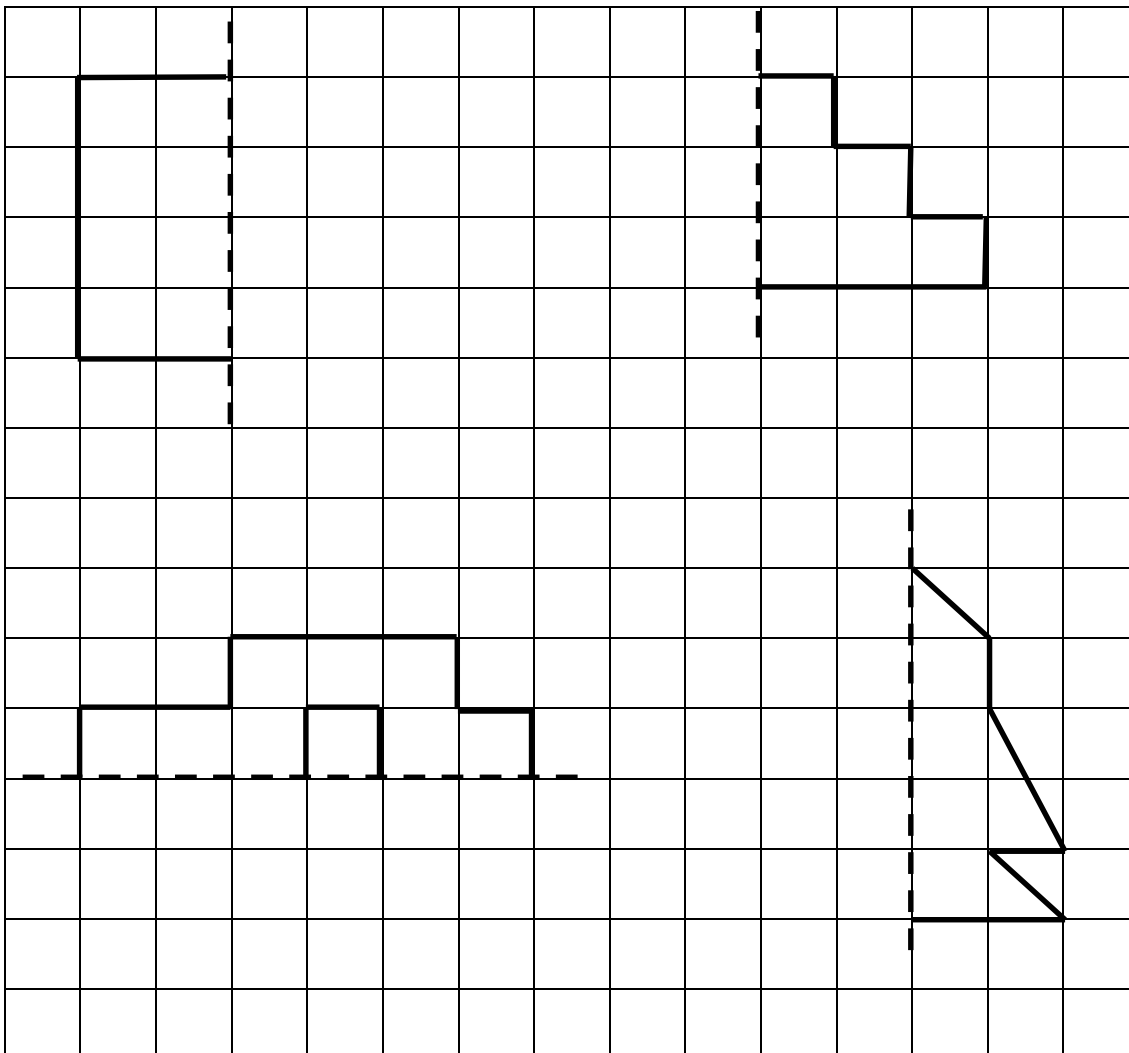
1) Score = ____/10 = ____% Effort = ____ 2) Score = ____/10 = ____% Effort = ____

1. Draw the lines of reflective (folding) symmetry on these shapes. Use a pencil and ruler.



(4)

2. Reflect these shapes in the dotted mirror line



(2)

(2 x 2)

Year 7 (Foundation): Shape and space 2

No Calculators Allowed!

Name:- _____ Form:- _____ Set:- _____

1) Score = ____/10 = ____% Effort = ____ 2) Score = ____/10 = ____% Effort = ____

(4)