

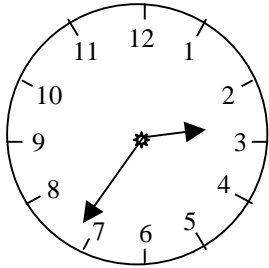
Year 7 (Foundation):

No Calculators Allowed!

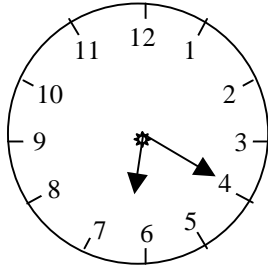
Name:- _____ Form:- _____ Set:- _____

1) Score = ____/10 = ____% Effort = ____

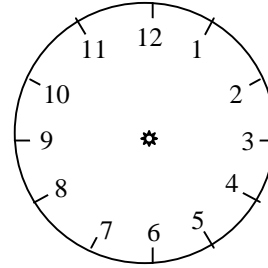
- 1 a) Write down the time on this clock face in words b) This clock shows the time in the afternoon. Write the time down in 24 hour format c) Show the time 17:55 on this clock face



Answer _____



Answer _____



Answer _____

(3)

- 2 A cake needs 17 minutes in the microwave. It is now 2:52 pm. When will the cake be ready?

Give your answer in numbers.

Answer _____

(1)

3

Month?						
M	T	W	T	F	S	S
28	29	1	2	3	4	5
6	7	8	9	10	11	12
13	14	15	16	17	18	19
20	21	22	23	24	25	26
27	28	29	30	31	1	2

- a) What day is 17th of this month?

Answer _____ (1)

- b) What day will be the 6th of the next month:

Answer _____ (1)

- c) There is only one Month that this could be. What is it?

Answer _____ (1)

- 4 Here is a timetable for the Lichfield to Birmingham local trains.

Lichfield	07:20	07:45	09:05	10:35	12:35
Shenstone	07:30	07:55		10:44	12:45
Blake's Barn	07:35	08:00		10:49	12:50
Sutton Coldfield	07:45	08:10	09:25	10:57	13:00
Erdington	07:55	08:20		11:04	13:10
Gravelly Hill	08:05	08:30	09:40	11:11	13:20
Birmingham	08:15	08:40	09:45	11:23	13:30

- a) How long does the 09:05 train take to get to Gravelly Hill

Answer _____ (1)

- b) Which is the latest train from Lichfield I could I take to meet a taxi at Erdington at a quarter past eight?

(1)

- c) If I started at Lichfield at 07:45, travelled to Sutton, shopped and then caught the 10:57 train to Birmingham, how long would I have been on the train? Give your answer in minutes.

Answer _____ (1)